



---

---

---

---

---

---

---

---



---

---

---

---

---

---

---

---



---

---

---

---

---

---

---

---

3

☀ = +3   🌧 = -3  
☔ = +2   🐼 = -2  
🌈 = +1   🐼 = -1

Donnez trois verbes "-ER"  
qui utilisent AVOIR  
au passé composé

---

---

---

---

---

---

---

---

4

☀ = +3   🌧 = -3  
☔ = +2   🐼 = -2  
🌈 = +1   🐼 = -1

Donnez trois verbes "-IR"  
qui utilisent AVOIR  
au passé composé

---

---

---

---

---

---

---

---

5

☀ = +3   🌧 = -3  
☔ = +2   🐼 = -2  
🌈 = +1   🐼 = -1

Donnez trois verbes "-RE"  
qui utilisent AVOIR  
au passé composé

---

---

---

---

---

---

---

---

6

☀️ = +3   🌧️ = -3  
🏠 = +2   🐼 = -2  
😊 = +1   🌪️ = -1

Donnez trois verbes **-ER**  
qui utilisent **ÊTRE**  
au passé composé

---

---

---

---

---

---

---

---

7

☀️ = +3   🌧️ = -3  
🏠 = +2   🐼 = -2  
😊 = +1   🌪️ = -1

Donnez trois verbes **-IR**  
qui utilisent **ÊTRE**  
au passé composé

---

---

---

---

---

---

---

---

8

☀️ = +3   🌧️ = -3  
🏠 = +2   🐼 = -2  
😊 = +1   🌪️ = -1

Donnez deux verbes **-RE**  
qui utilisent **ÊTRE**  
au passé composé

---

---

---

---

---

---


---

---

9

Écrivez CINQ verbes  
qui ont un participe passé  
irrégulier



 = +3	 = -3
 = +2	 = -2
 = +1	 = -1

---

---

---

---

---


---







---

---

10

Écrivez la phrase au passé:  
Ma mère/sortir/samedi



 = +3	 = -3
 = +2	 = -2
 = +1	 = -1

---

---

---

---

---


---







---

---

11

Écrivez la phrase au passé  
Mes amis/faire/les devoirs



 = +3	 = -3
 = +2	 = -2
 = +1	 = -1

---

---

---

---







---

---

---

---

12

 = +3	 = -3
 = +2	 = -2
 = +1	 = -1

Écrivez la phrase au passé  
Nicole et Claire/aller/au parc

---

---

---

---

---

---

---

---

13

 = +3	 = -3
 = +2	 = -2
 = +1	 = -1

Répondez au passé  
Où es-tu allé(e) hier?

---

---

---

---







---

---

---

---

14

 = +3	 = -3
 = +2	 = -2
 = +1	 = -1

Répondez au passé  
Qu'est-ce que  
tu as fait hier soir?

---

---

---

---

---

---

---

---

 15  = +3  = -3  
 = +2  = -2  
 = +1  = -1

Comment dit-on  
« last year » en français?

---

---

---

---

---

---

---

---

 16  = +3  = -3  
 = +2  = -2  
 = +1  = -1

Écrivez TROIS expressions  
du passé en français

---

---

---

---

---

---

---

---

 17  = +3  = -3  
 = +2  = -2  
 = +1  = -1

Écrivez la phrase au passé  
Je/voir/un film

---

---

---

---

---

---

---

---

18

☀ = +3   ☁ = -3  
☔ = +2   🌧 = -2  
☺ = +1   ☹ = -1

Écrivez la phrase au passé  
Amanda/se lever/à 10h

---

---

---

---

---

---

---

---

19

☀ = +3   ☁ = -3  
☔ = +2   🌧 = -2  
☺ = +1   ☹ = -1

Il y a \_\_\_\_ parties pour  
former le passé composé

---

---

---

---

---

---

---

---

20

☀ = +3   ☁ = -3  
☔ = +2   🌧 = -2  
☺ = +1   ☹ = -1

Mettez en ordre ces expressions  
et après, identifiez-les en anglais  
finalment, ensuite, d'abord, après

---

---

---

---

---

---

---

---

21

Les profs \_\_\_\_ (tomber)  
sur les escaliers



---

---

---

---

---

---

---

---

22

Mlle Grasso \_\_\_\_ (être)  
fâchée avec nous



---

---

---

---

---

---

---

---

23

Faites négatif  
J'ai joué au volley



---

---

---

---

---

---

---

---



 24  = +3  = -3  
 = +2  = -2  
 = +1  = -1

Faites négatif  
Mes amies  
sont arrivées à 18h

---

---

---



---

---

---

---

---

 25  = +3  = -3  
 = +2  = -2  
 = +1  = -1

Jared et Brett  
\_\_\_\_ (naître) en 2000

---

---

---

---

---

---

---

---